



R. Nikeram

PILLAI COLLEGE OF ENGINEERING, NEW PANVEL

(Autonomous) (Accredited 'A+' by NAAC)

**END SEMESTER EXAMINATION
SECOND HALF 2021**

BRANCH: FE (MECH/AUTO)

Subject: Engineering Physics – I

Max. Marks: 45

N.B 1. Q.1 is compulsory

2. Attempt any two from the remaining three questions

Time: 02.00 Hours

Date: 06-04-2022

Q.1.	Attempt all	M	BT	CO
a)	What are LASERS? Give the distinguishing characteristics of LASER light.	3	1	1
b)	Explain Numerical Aperture (NA) in Optical Fibers. How does the value of NA change with the refractive index of the surrounding medium?	3	2	2
c)	Apply Heisenberg's Uncertainty Principle to prove the non-existence of electrons in the nucleus.	3	3	3
d)	Distinguish between Type I and Type II superconductors with a relevant diagram. Why TYPE II superconductors find more applications in comparison to TYPE I?	3	2	4
e)	Prove that Divergence of Curl of a vector field is zero.	3	3	6
Q.2.	Attempt all			
a)	Explain the construction and working of He-Ne laser.	4	2	1
b)	Derive Maxwell's 3 rd and 4 th equations in integral and differential form and give their significance.	5	3	6
c)	Determine the transition temperature and the critical field <u>at 4.2 K</u> for a given specimen of a superconductor if the critical fields are 1.41×10^5 A/m and 4.205×10^5 A/m at 1.41 K and 12.9 K respectively.	6	4	4
Q.3.	Attempt all			
a)	What is a hologram? Describe the process of recording and reconstruction of hologram.	4	2	1
b)	Assuming Schrodinger's Time dependent equation, derive one dimensional Schrodinger's Time Independent equation.	5	2	3
c)	A step index fibre has a core diameter of 29 μm . The refractive indices of core and cladding are 1.52 and 1.5189 respectively. If the light of wavelength 1.3 μm is transmitted through the fibre, determine: (i) Numerical Aperture of the fibre (surrounding medium is air) (ii) Normalized frequency of the fibre (iii) The number of modes the fibre can support	6	3	2

P.T.O

Q.4.	Attempt all		
a)	Give the important assumptions of the BCS theory and hence explain formation of Cooper pairs in a superconductor.	4	
b)	Explain with relevant diagrams, the following terms related to LASERS; i) Spontaneous emission ii) Stimulated emission iii) Metastable state iv) Population inversion v) Pumping	5	1
c)	An electron is bound in a one dimensional infinite potential well of width 2 \AA . Find its energy in the ground state and in first two excited states. What happens to the gap between consecutive energy levels(states) of the potential well, with increasing value of 'n'?	6	

co1- Explain the functioning of lasers and their various applications.

co2- Able to explain the working principle of optical fibres and their applications especially in the field of communication

co3- Explain the limits of Classical Physics and apply the fundamentals of quantum mechanics to study the one dimensional motion of microscopic particles.

co4- Apply the knowledge of superconductivity to SQUID and Magnetic levitation.

co5- Apply the reasons for Acoustic defects and use this in the proper design of a Hall/Auditorium and use the knowledge of Piezoelectric and Magnetostriction effect for production of ultrasonic waves and its application in various fields

co6- Apply the knowledge of coordinate systems and vector calculus to various situations.

Also the learner will be able to study further as the base is set in this topic.

BT Levels: - 1 Remembering, 2 Understanding, 3 Applying, 4 Analyzing, 5 Evaluating, 6 Creating.

M-Marks, BT- Bloom's Taxonomy, CO-Course Outcomes.

Mech/Auto.

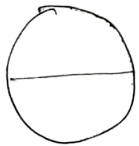
1 a) Light Amplification by Stimulated Emission of radiation (LASERS)

- (i) Highly monochromatic
- (ii) highly intense (1+2M)
- (iii) Low angular divergence
- (iv) very high power concentrated in very small area.

b) N.A. of an optical fiber is light accepting capacity of the fiber. $N.A. = \frac{\sqrt{n_1^2 - n_2^2}}{n_0}$ (2M+1M)

As the R.I. of surrounding medium increases N.A. decreases.

Q.1 c) Non existence of electron in the nucleus. (3M)
maximum uncertainty in the measuring position of electron is $\Delta x =$ Diameter of the nucleus.



$$\Delta x \Delta p_x = h$$

$$\Delta x = 10^{-15} \text{ m}$$

$$\Delta p_x = \frac{h}{\Delta x} = \frac{h}{2\pi \Delta x} = \frac{6.63 \times 10^{-34}}{2\pi \times 10^{-15}}$$

$$\Delta p_x \approx p$$

Energy of the electron

$$E = pc = 1.05 \times 10^{-19} \times 3 \times 10^8 = 3.16 \times 10^{-11} \text{ J}$$

$$1 \text{ eV} = 1.6 \times 10^{-19} \text{ J}$$

$$1 \text{ MeV} = 1.6 \times 10^{-13} \text{ J}$$

$$E = \frac{3.16 \times 10^{-11}}{1.6 \times 10^{-13}} \text{ MeV}$$

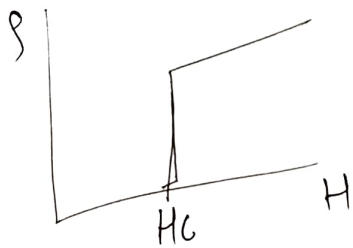
$$= 197.8 \text{ MeV}$$

$$E \approx 200 \text{ MeV}$$

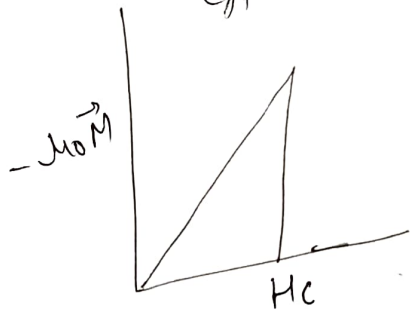
During nuclear transformation when neutron is converted into proton β particles are emitted which has energy equal to 3 to 4 MeV which proves that electron does not exist in the nucleus.

Q.1 d) Type I & Type II

- ① Transition from Superconducting state to normal state or normal state to superconducting state is sharp & at H_c
- ② It has only one value of critical magnetic field (H_c)



- ③ Obey complete Meissner effect.



- ④ Very low value of $H_c = 0.1$ to 0.2 T

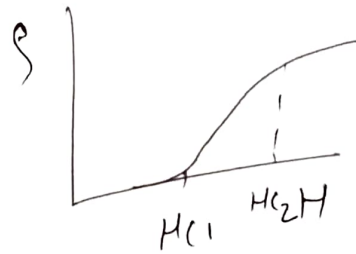
- ⑤ Limited applications in industry

- ⑥ e.g. Pb, Hg, Al etc.

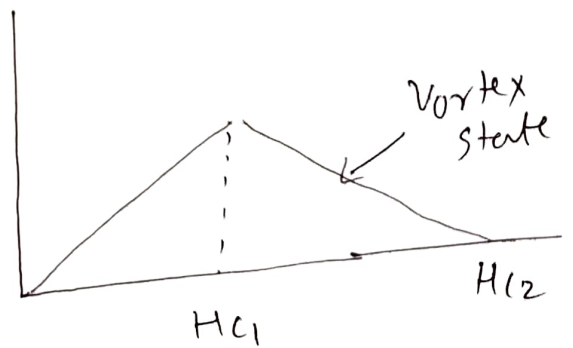
Superconductors (3M)

Transition from Normal state superconducting state is gradual when applied field changes from H_{c1} to H_{c2}

Two critical magnetic fields (H_{c1} & H_{c2})



obey Meissner effect only upto H_{c1}



- ④ very High value of H_{c2} around 30 to 50 T

- ⑤ Very high applications of Type-II superconductors in industry.

- ⑥ Alloys of transition metals & Ceramic materials.

$$\nabla \cdot \text{curl } \vec{F} = \nabla \cdot \left(\vec{i} \frac{\partial}{\partial x} + \vec{j} \frac{\partial}{\partial y} + \vec{k} \frac{\partial}{\partial z} \right) \cdot \left(\vec{i} \left(\frac{\partial F_3}{\partial y} - \frac{\partial F_2}{\partial z} \right) + \vec{j} \left(\frac{\partial F_1}{\partial z} - \frac{\partial F_3}{\partial x} \right) + \vec{k} \left(\frac{\partial F_2}{\partial x} - \frac{\partial F_1}{\partial y} \right) \right) \quad (3M)$$

$$\left[\vec{i} \left(\frac{\partial F_3}{\partial y} - \frac{\partial F_2}{\partial z} \right) + \vec{j} \left(\frac{\partial F_1}{\partial z} - \frac{\partial F_3}{\partial x} \right) + \vec{k} \left(\frac{\partial F_2}{\partial x} - \frac{\partial F_1}{\partial y} \right) \right]$$

$$= \frac{\partial^2 F_3}{\partial x \partial y} - \frac{\partial^2 F_2}{\partial x \partial z} - \frac{\partial^2 F_3}{\partial y \partial x} + \frac{\partial^2 F_1}{\partial y \partial z} + \frac{\partial^2 F_2}{\partial z \partial x} - \frac{\partial^2 F_1}{\partial z \partial y}$$

$$= 0$$

$$\nabla \times \vec{F} = \begin{vmatrix} \vec{i} & \vec{j} & \vec{k} \\ \frac{\partial}{\partial x} & \frac{\partial}{\partial y} & \frac{\partial}{\partial z} \\ F_1 & F_2 & F_3 \end{vmatrix}$$

Q. 2 a) Construction & working of He-Ne laser (2M+2M) (4 Marks)

b) Maxwell's 3rd & 4th equations in integral & differential form & their significance (2M+3M) (5 Marks)

$$\oint_C \vec{E} \cdot d\vec{l} = \text{EMF}_{\text{total}} = -\frac{\partial \phi}{\partial t}$$

By Stokes theorem.

$$\oint_C \vec{E} \cdot d\vec{l} = \int_S (\nabla \times \vec{E}) \cdot d\vec{S}$$

$$\int_S \nabla \times \vec{E} \cdot d\vec{S} = -\frac{\partial \phi}{\partial t}$$

$$\int_S \vec{B} \cdot d\vec{S} = \phi = \int d\phi$$

$$\int_S \nabla \times \vec{E} \cdot d\vec{S} = -\frac{\partial}{\partial t} \int_S \vec{B} \cdot d\vec{S}$$

$$\boxed{\nabla \times \vec{E} = -\frac{\partial \vec{B}}{\partial t}} \Rightarrow \text{diff form of 3rd Maxwell's eqn}$$

$$\oint_C \vec{E} \cdot d\vec{l} = - \int_S \frac{\partial \vec{B}}{\partial t} \cdot d\vec{s}$$

Integral form of 3rd Maxwell's eqⁿ.

4th Maxwell's eqⁿ.
 Loop is equal to circulation of \vec{H} around the closed current enclosed by that loop.

$$\oint_C \vec{H} \cdot d\vec{l} = I_{\text{enclosed}} \rightarrow \text{Ampere's circuital law}$$

By Stokes theorem line integral is converted into surface integral of curl of vector field.

$$\oint_C \vec{H} \cdot d\vec{l} = \int_S (\nabla \times \vec{H}) \cdot d\vec{s} \quad \int_S \vec{J} \cdot d\vec{s} = I_{\text{enclosed}}$$

$\nabla \times \vec{H} = \vec{J}$ point form of Ampere's law

$$\text{Div}(\text{curl } \vec{H}) = 0$$

$$\nabla \cdot (\nabla \times \vec{H}) = \text{Div } \vec{J} = 0$$

Comparing this eqⁿ with equation of continuity

$$\text{Div } \vec{J} + \frac{\partial \rho}{\partial t} = 0$$

eqⁿ (1) is valid only when $\frac{\partial \rho}{\partial t} = 0$

Thus Ampere's law is inconsistent with eqⁿ of continuity. Maxwell argued that there should be one more term in the R.H.S. of the eqⁿ.

$$\nabla \times \vec{H} = \vec{J} + \frac{\partial \vec{D}}{\partial t}$$

where $\frac{\partial \vec{D}}{\partial t}$ = displacement current

Maxwell's eqⁿ.

$$\oint_C \vec{H} \cdot d\vec{l} = \mu_0 \mu_0 I + \mu_0 \mu_0 \frac{\partial \phi_E}{\partial t}$$

$$= \mu_0 \mu_0 (I + I_d)$$

↳ Integral form of 4th Maxwell's eqⁿ.

$$H_c(T) = H_c(0) \left[1 - \left(\frac{T}{T_c} \right)^2 \right]$$

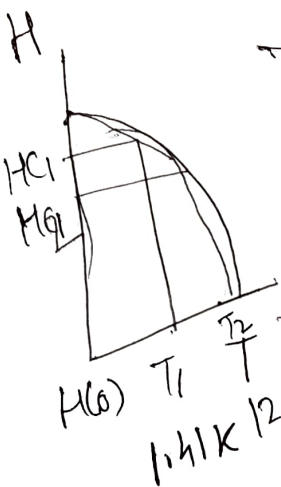
$$H_c(4.2 \text{ K}) = ? \quad (6 \text{ M})$$

$$H_c(1.41 \text{ K}) = 1.41 \times 10^5 \text{ A/m}$$

$$H_c(12.9 \text{ K}) = 4.205 \times 10^5 \text{ A/m}$$

$$H_c(1.41 \text{ K}) = H_c(0) \left[1 - \left(\frac{1.41}{T_c} \right)^2 \right] \quad \text{--- (1)}$$

$$H_c(12.9 \text{ K}) = H_c(0) \left[1 - \left(\frac{12.9}{T_c} \right)^2 \right] \quad \text{--- (2)}$$



$$\frac{1.41 \times 10^5}{4.205 \times 10^5} = \frac{\left[1 - \left(\frac{1.41}{T_c} \right)^2 \right]}{\left[1 - \left(\frac{12.9}{T_c} \right)^2 \right]}$$

$$1.41 \times 10^5 \left[1 - \frac{(12.9)^2}{T_c^2} \right] = 4.205 \times 10^5 \left[1 - \frac{(1.41)^2}{T_c^2} \right]$$

$$1.41 \times 10^5 \left[\frac{T_c^2 - (12.9)^2}{T_c^2} \right] = 4.205 \times 10^5 \left[\frac{T_c^2 - (1.41)^2}{T_c^2} \right]$$

$$\phi. \frac{1.41 \times 10^5 T_c^2 - 1.41 \times 10^5 (12.9)^2}{T_c^2} = \frac{4.205 \times 10^5 T_c^2 - 4.205 \times 10^5 (1.41)^2}{T_c^2}$$

$$\frac{1.41 \times 10^5}{4.205 \times 10^5} = \frac{T_c^2 - (1.41)^2}{T_c^2} \times \frac{T_c^2}{T_c^2 - (12.9)^2}$$

$$1.41 \times 10^5 (T_c^2 - 166.41) = 4.205 \times 10^5 (T_c^2 - 1.9881)$$

$$4.205 \times 10^5 T_c^2 - 1.41 \times 10^5 T_c^2 = 1.41 \times 10^5$$

$$10^5 T_c - 2.3 \times 10^7 = 4.205 \times 10^5 T_c^2 - 8.35 \times 10^5$$

$$4.205 \times 10^5 T_c^2 - 1.41 \times 10^5 T_c^2 = 8.35 \times 10^5 - 2.3 \times 10^7$$

$$\frac{0.3353}{1} = \frac{T_c^2 - 1.9881}{T_c^2 - 166.41}$$

$$0.3353 T_c^2 - 0.3353 \times 166.41 = T_c^2 - 1.9881$$

$$T_c^2 - 0.3353 T_c^2 = -0.3353 \times 166.41 + 1.9881$$

$$(1 - 0.3353) T_c^2 = -55.79 +$$

$$= -53.81$$

$$0.6647 T_c^2 = -53.81$$

$$-\frac{\hbar^2}{2m} \frac{\partial^2 \psi(x,t)}{\partial x^2} + V \psi(x,t) = -i\hbar \frac{\partial \psi(x,t)}{\partial t} \quad (5M)$$

1-D Time dependent schrodinger's wave eqn.

$$\psi(x,t) = A e^{i(kx - \omega t)}$$

$$\omega = \frac{E}{\hbar}$$

$$-\frac{\hbar^2}{2m} \frac{d^2 \psi(x)}{dx^2} \cdot e^{-iEt/\hbar} = \psi(x) \cdot \frac{-iEt}{\hbar} = \psi(x) \cdot \frac{-iEt}{\hbar} = \psi(x) \cdot \frac{-iEt}{\hbar}$$

$$+ V \psi(x) \cdot e^{-iEt/\hbar} = \psi(x) \cdot \frac{-iEt}{\hbar} = \psi(x) \cdot \frac{-iEt}{\hbar}$$

$$\frac{\partial \psi}{\partial t} = \psi(x) \cdot \frac{-iEt}{\hbar} = \psi(x) \cdot \frac{-iEt}{\hbar}$$

$$i\hbar \frac{\partial \psi(x,t)}{\partial t} = \psi(x) \cdot \frac{-iEt}{\hbar} = \psi(x) \cdot \frac{-iEt}{\hbar}$$

$$\frac{\partial^2 \psi(x,t)}{\partial x^2} = \frac{d^2 \psi(x)}{dx^2} \cdot e^{-iEt/\hbar}$$

$$\boxed{-\frac{\hbar^2}{2m} \frac{d^2 \psi}{dx^2} + V \psi(x) = E \psi(x)}$$

1-D T I S W E

Q.3c)

$$V = \frac{\pi d}{\lambda} \cdot N.A.$$

$$N.A = \sqrt{n_1^2 - n_2^2}$$

$$d = 29 \mu\text{m}$$

$$n_1 = 1.52, n_2 = 1.5189$$

$$\lambda = 1.3 \mu\text{m}$$

$$N.A = \sqrt{(1.52)^2 - (1.5189)^2}$$

$$= \sqrt{3.34279 \times 10^{-3}}$$

$$N.A = 0.0578 \text{ --- Ans. (2M)}$$

$$\text{Normalized freq / V-number} = \frac{\pi d}{\lambda} \cdot N.A$$

$$= \frac{\pi \times 29 \mu\text{m}}{1.3 \mu\text{m}} \cdot 0.0578$$

$$V = 4.05 \text{ --- Ans. (2M)}$$

$$N_m = \frac{V^2}{2} = 8.20$$

$$\text{Number of modes supported} = 8 \text{ --- Ans. (2M)}$$

Q.4 c)

$$E_n = \frac{n^2 h^2}{8mL^2}$$

for $n=1$ $E_1 =$ ground state.

$n=2$ $E_2 =$ first excited state

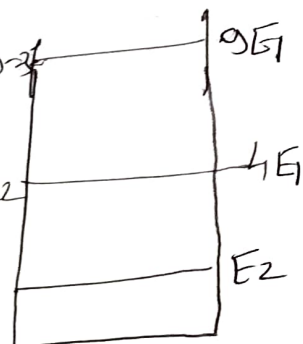
$n=3$ $E_3 =$ second excited state

$$E_1 = \frac{(6.63 \times 10^{-34})^2}{8 \times 9.1 \times 10^{-31} \times (2 \times 10^{-10})^2}$$

$$E_2 = 4E_1 = 6.038 \times 10^{-18} \text{ J}$$

$$E_3 = 9E_1 = 1.358 \times 10^{-17} \text{ J}$$

(4M)



Gap between consecutive energy levels $n=1$ will increase with increasing value of n .